

Accommodations/Modifications for Assignments

- Take frequent breaks. Do a few problems and then take a stretch break.
- You can read the material aloud to your child.
- You can write the answers down for your child.
- Let your child type or text their answers.
- You can shorten the amount of problems your child has to do. Example, do the odd (1,3,5,7, etc.) numbered problems or the even (2,4,6,8, etc.) numbered problems.
- Your child can use a calculator if needed for math problems with several steps to complete.
- You can use hands on activities to support the lesson. Example, use objects to count to help your child add or subtract math problems.

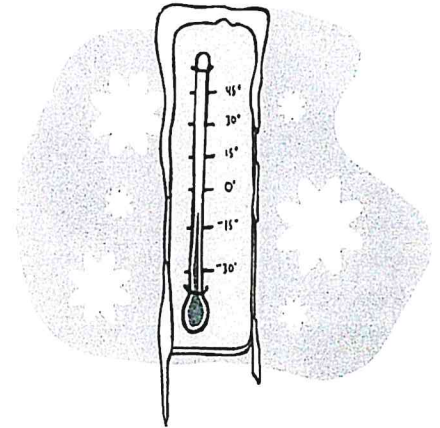
Additional review work is also included. If your child has trouble with the assignment that has been posted, you can work on alternative assignments that are included.

ABSOLUTELY!

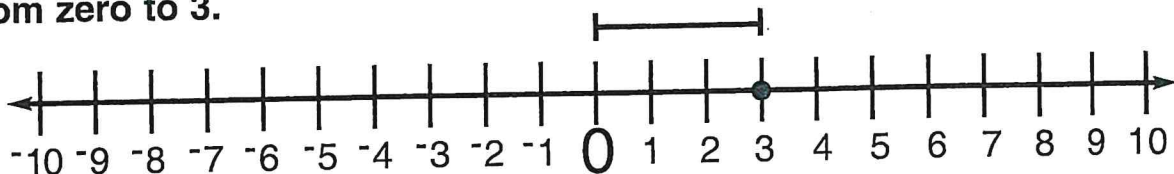
Absolute value asks this question: How many places from zero is the integer?

Break It Down:

Ask, "How many places from zero is the integer?"
This answer is never negative. It is zero or a positive integer.



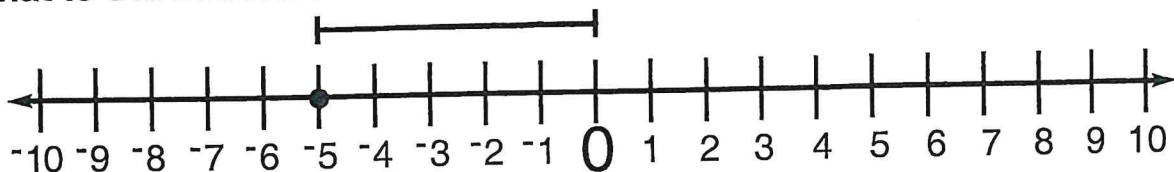
What is the absolute value of 3? Count the places from zero to 3.



3 is 3 places from 0!

3 has an absolute value of 3, because it is 3 places from 0.

What is the absolute value of -5 ? Count the places from zero to -5 .



-5 is 5 places from 0!

-5 has an absolute value of 5, because it is 5 places from 0.

Math Fact: The absolute value of zero is zero! ZERO is ZERO places from zero!



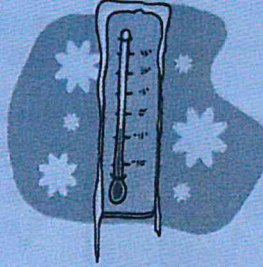
Which question do you ask to find the absolute value?

ABSOLUTELY!

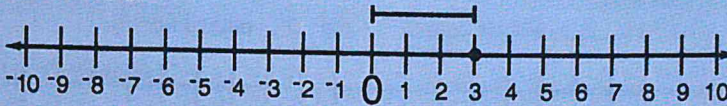
Absolute value asks this question: How many places from zero is the integer?

Break It Down:

Ask, "How many places from zero is the integer?"
This answer is never negative. It is zero or a positive integer.



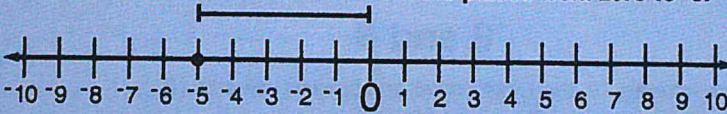
What is the absolute value of 3? Count the places from zero to 3.



3 is 3 places from 0!

3 has an absolute value of 3, because it is 3 places from 0.

What is the absolute value of -5 ? Count the places from zero to -5 .



-5 is 5 places from 0!

-5 has an absolute value of 5, because it is 5 places from 0.

Math Fact: The absolute value of zero is zero! ZERO is ZERO places from zero!



Which question do you ask to find the absolute value?

HOW MANY PLACES FROM ZERO IS THE INTEGER?

© Illegal to Copy

www.firelightbooks.com

121

UNIT 5

YOU ARE ABSOLUTELY RIGHT!

The absolute value of an integer is the positive value of that integer. Remember:

- For a positive integer, it is the number.
- For a negative integer it has a positive value.
- The absolute value is never negative.

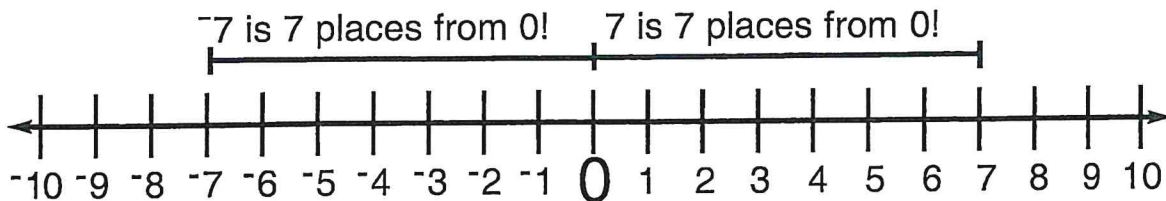



OPPOSITES ARE THE SAME!

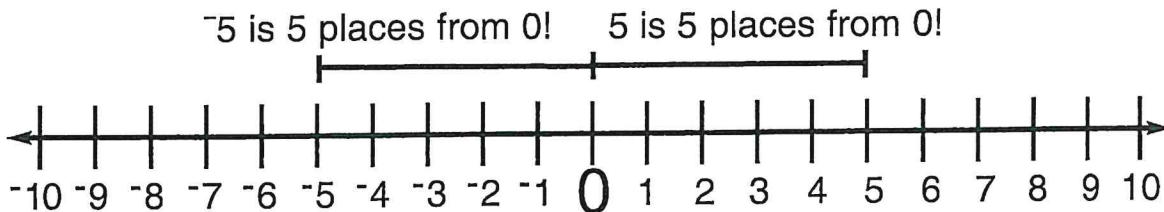
Opposites have the same value!

Break It Down:

The integers -7 and 7 both have an absolute value of 7 . -7 and 7 are both 7 places from 0 !



The integers -5 and 5 both have an absolute value of 5 . -5 and 5 are both 5 places from 0 !



Absolute value questions are written with two bars around the integer.
For example:

$$|8|$$

$$|3|$$

$$|-7|$$

The Game: Answer the questions.

What is the absolute value of -3 ? _____

What is the absolute value of -8 ? _____

What is the absolute value of 4 ? _____

What is the absolute value of 0 ? _____

$2 > -4$

$0 > -5$

$0 < 6$

$-4 < 2$

$0 > -3$

$-3 > -7$

© Illegal to Copy

www.firelightbooks.com

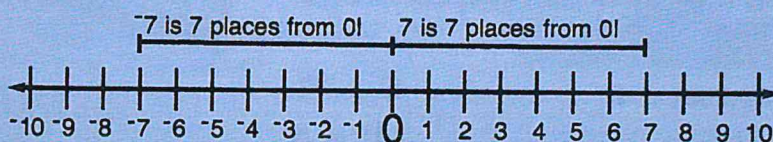

120

OPPOSITES ARE THE SAME!

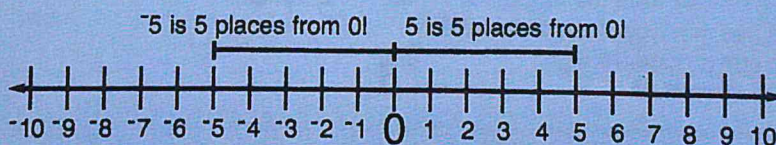
Opposites have the same value!

Break It Down:

The integers -7 and 7 both have an absolute value of 7 . -7 and 7 are both 7 places from 0 !



The integers -5 and 5 both have an absolute value of 5 . -5 and 5 are both 5 places from 0 !



Absolute value questions are written with two bars around the integer.
For example:

$|8|$

$|3|$

$|-7|$

The Game: Answer the questions.

What is the absolute value of -3 ? 3

What is the absolute value of -8 ? 8

What is the absolute value of 4 ? 4

What is the absolute value of 0 ? 0

© Illegal to Copy


www.firelightbooks.com

122

YOU ARE ABSOLUTELY RIGHT!

The absolute value of an integer is the positive value of that integer. Remember:

- For a positive integer, it is the number.
- For a negative integer it has a positive value.
- The absolute value is never negative.



Absolute value is written like this:

$$|-5| = 5$$

The Game: Write the absolute value of each number in the blanks below.

$|-5| = \underline{\quad}$

$|5| = \underline{\quad}$

$|-15| = \underline{\quad}$

$|12| = \underline{\quad}$

$|-50| = \underline{\quad}$

$|30| = \underline{\quad}$

$|100| = \underline{\quad}$

$|-75| = \underline{\quad}$

$|-60| = \underline{\quad}$

$|-125| = \underline{\quad}$

The Game: Answer the questions.

What is the absolute value of a positive integer?

What is the absolute value of a negative integer?

Can the absolute value be negative?

Math Fact: The absolute value of zero is zero! ZERO IS ZERO places from zero!



Which question do you ask to find the absolute value?

HOW MANY PLACES FROM ZERO IS THE INTEGER?

© Illegal to Copy

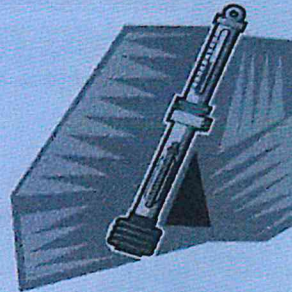
www.firelightbooks.com

121

YOU ARE ABSOLUTELY RIGHT!

The absolute value of an integer is the positive value of that integer. Remember:

- For a positive integer, it is the number.
- For a negative integer it has a positive value.
- The absolute value is never negative.



Absolute value is written like this:

$$|-5| = 5$$

The Game: Write the absolute value of each number in the blanks below.

$$|-5| = \underline{5}$$

$$|5| = \underline{5}$$

$$|-15| = \underline{15}$$

$$|12| = \underline{12}$$

$$|-50| = \underline{50}$$

$$|30| = \underline{30}$$

$$|100| = \underline{100}$$

$$|-75| = \underline{75}$$

$$|-60| = \underline{60}$$

$$|-125| = \underline{125}$$

The Game: Answer the questions.

What is the absolute value of a positive integer?

THE NUMBER

What is the absolute value of a negative integer?

A POSITIVE VALUE

Can the absolute value be negative?

NO

© Illegal to Copy

www.firelightbooks.com


GET THE ABSOLUTE VALUE

You know that absolute value asks how many places an integer is from zero.

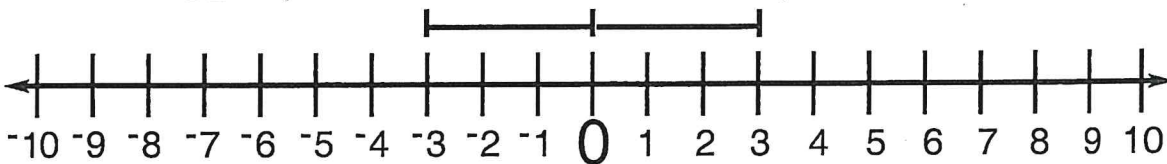
The Game: Fill in the blanks.

-3 and 3

The integers -3 and 3 both have an absolute value of _____. -3 and 3 are both _____ places from 0 .



-3 is _____ places from 0 . 3 is _____ places from 0 .



$$|-3| = \underline{\hspace{2cm}} \qquad |3| = \underline{\hspace{2cm}}$$

The Game: Fill in the blanks and draw the number line.

-8 and 8

The integers -8 and 8 both have an absolute value of _____.
 -8 and 8 are both _____ places from 0 .

-8 is _____ places from 0 . 8 is _____ places from 0 .

$$|-8| = \underline{\hspace{2cm}} \qquad |8| = \underline{\hspace{2cm}}$$

GET THE ABSOLUTE VALUE

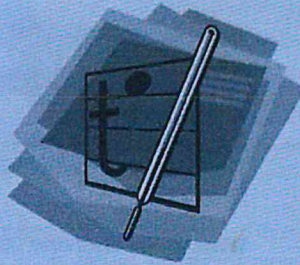
Ch. 2.5

You know that absolute value asks how many places an integer is from zero.

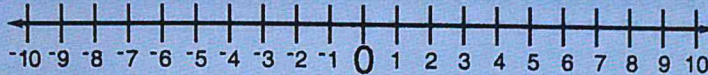
The Game: Fill in the blanks.

-3 and 3

The integers -3 and 3 both have an absolute value of 3. -3 and 3 are both 3 places from 0.



-3 is 3 places from 0. 3 is 3 places from 0.



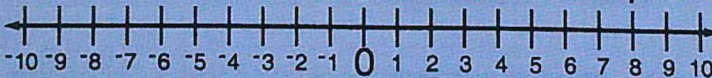
$$|-3| = \underline{3} \quad |3| = \underline{3}$$

The Game: Fill in the blanks and draw the number line.

-8 and 8

The integers -8 and 8 both have an absolute value of 8. -8 and 8 are both 8 places from 0.

-8 is 8 places from 0. 8 is 8 places from 0.



$$|-8| = \underline{8} \quad |8| = \underline{8}$$

UNIT 5

© Illegal to Copy

www.firelightbooks.com

124

ADDING ON A NUMBER LINE

Ch. 2.6

You can add integers on a number line. Move right to add positive integers. Move left to add negative integers.

$$1 + 3 = 4$$

Move right to add positive integers.



FOR REAL

Sam is on his way to visit a friend. He drives for a while, and then he figures out that he is driving in the wrong direction!

He is going north, when he should be going south. Sam sees the mile marker and figures out that he has gone 6 miles too far.

Find the absolute value of -6 . That tells you how far Sam has to go back.

What is the absolute value of -6 ? _____

$$|-6| = \underline{\hspace{2cm}}$$



Nia took the city bus to the mall. Suddenly she saw she had gone too far! Nia sees the mile marker and figures out that she has gone 12 miles too far.

Find the absolute value of -12 . That tells you how far Nia has to go back.

What is the absolute value of -12 ? _____

$$|-12| = \underline{\hspace{2cm}}$$



What is the absolute value of zero?

Ch 25

FOR REAL

Sam is on his way to visit a friend. He drives for a while, and then he figures out that he is driving in the wrong direction!

He is going north, when he should be going south. Sam sees the mile marker and figures out that he has gone 6 miles too far.

Find the absolute value of -6 . That tells you how far Sam has to go back.

What is the absolute value of -6 ? 6
 $|-6| = \underline{6}$



Nia took the city bus to the mall. Suddenly she saw she had gone too far! Nia sees the mile marker and figures out that she has gone 12 miles too far.


Find the absolute value of -12 . That tells you how far Nia has to go back.

What is the absolute value of -12 ? 12
 $|-12| = \underline{12}$



What is the absolute value of zero?

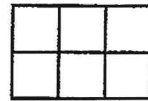
ZERO



MINUTE 1

NAME _____

1. The area of the shape is 6 square units.
Circle: True or False

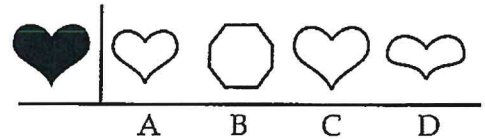


2. Jenna wants to purchase a pad of drawing paper for \$5.00, a charcoal pencil for \$0.75, and an eraser for \$1.25. How much money does she need altogether to buy the supplies? _____

3.
$$\begin{array}{r} 45 \\ +4 \\ \hline \end{array}$$

4. Complete the fact family.
 $5 \times 7 = 35$
 $7 \times 5 = \underline{\hspace{2cm}}$
 $35 \div 7 = \underline{\hspace{2cm}}$
 $35 \div 5 = \underline{\hspace{2cm}}$

5. Circle the figure that matches the shaded figure:




6. The difference of 8 and 5 is _____.
7. The expanded form of 654 is $600 + 50 + \underline{\hspace{2cm}}$.
8. The sum of 8 and 5 is _____.

For questions 9 and 10, circle the digit in the tens place.

9. 456

10. 925



MINUTE 2

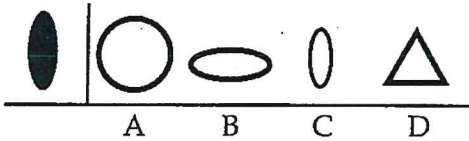
NAME _____

1. $15 - 8 =$

2. 4, 8, 12, 16, 20, _____, _____, _____

3.
$$\begin{array}{r} 33 \\ + 5 \\ \hline \end{array}$$

4. Circle the figure that is congruent to the shaded figure:



5.
$$\begin{array}{r} 33 \\ - 5 \\ \hline \end{array}$$

6. Complete the fact family.

$6 \times 7 = 42$



$7 \times 6 = \underline{\hspace{2cm}}$


$42 \div 7 = \underline{\hspace{2cm}}$

$42 \div 6 = \underline{\hspace{2cm}}$

7.
$$\begin{array}{r} 12 \\ \times 6 \\ \hline \end{array}$$

In questions 8–10, does the figure have a line of symmetry? Write *yes* or *no*. If yes, draw a line of symmetry.





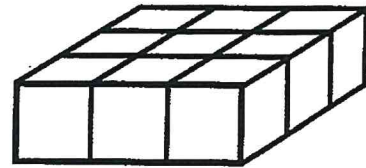
MINUTE 3

NAME _____

1. $4 \overline{)72}$

2. $\begin{array}{r} 21 \\ + 6 \\ \hline \end{array}$

3. The volume of the shape is 9 cubic units.
Circle: True or False



4. Complete the fact family.
 $5 \times 8 = 40$
 $8 \times 5 = \underline{\hspace{2cm}}$
 $40 \div 8 = \underline{\hspace{2cm}}$
 $40 \div 5 = \underline{\hspace{2cm}}$

5. Polly bought a new collar and leash for her dog. The total was \$7.50. She paid with a ten-dollar bill. How much change did she receive?

6. $\begin{array}{r} 45 \\ - 3 \\ \hline \end{array}$

7. $\begin{array}{r} 14 \\ \times 5 \\ \hline \end{array}$

Use <, >, or = to complete questions 8-10.

8. $3 \underline{\hspace{1cm}} 13$

9. $31 \underline{\hspace{1cm}} 13$

10. $310 \underline{\hspace{1cm}} 310$



MINUTE 4

NAME _____

1.
$$\begin{array}{r} 85 \\ - 2 \\ \hline \end{array}$$

2. $7 \overline{)35}^5$ Which number is the dividend in this problem? _____

3. Riley has a 100-page book. She has read half of it. How many pages does she have left to read? _____ pages

4. Complete the fact family.
 $9 \times 4 = \underline{\hspace{2cm}}$
 $4 \times 9 = \underline{\hspace{2cm}}$
 $36 \div 9 = \underline{\hspace{2cm}}$
 $36 \div 4 = \underline{\hspace{2cm}}$

5. $4 \overline{)28}$



6.
$$\begin{array}{r} 62 \\ + 7 \\ \hline \end{array}$$

7.
$$\begin{array}{r} 16 \\ \times 7 \\ \hline \end{array}$$


For questions 8–10, write the equivalent fraction.

8.  =  9.  = 

$\frac{2}{4} = \underline{\hspace{2cm}}$ $\frac{3}{9} = \underline{\hspace{2cm}}$

10.  = 

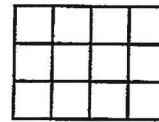
$\frac{2}{10} = \underline{\hspace{2cm}}$



MINUTE 5

NAME _____

1. The area of the shape is 9 square units.
Circle: True or False



2. $3 \times 5 = 15$ Which number is the product? _____

3.
$$\begin{array}{r} 68 \\ - 5 \\ \hline \end{array}$$

4. Carol wants to buy 6 pens for \$0.75 each. How much money does she need to buy the pens? _____

5.
$$\begin{array}{r} 21 \\ + 6 \\ \hline \end{array}$$

6.
$$8 \overline{)72}$$

7. The expanded form of 489 is $400 + \underline{\hspace{1cm}} + 9$.

8.
$$\begin{array}{r} 18 \\ \times 6 \\ \hline \end{array}$$

For questions 9 and 10, write in the value of the underlined digit.

9. $\underline{5}0 = \underline{\hspace{1cm}}$ tens

10. $\underline{7}0 = \underline{\hspace{1cm}}$ tens

BELLWORK ANSWER KEY

Minute 1

1. True
2. 7 dollars
3. 49
4. 35, 5, 7
5. A
6. 3
7. 4
8. 13
9. 5
10. 2

Minute 2

1. 7
2. 24, 28, 32
3. 38
4. C
5. 28
6. 42, 6, 7
7. 72
8. Yes
9. Yes
10. No

Minute 3

1. 18
2. 27
3. True
4. 40, 5, 8
5. \$2.50
6. 42
7. 70
8. <
9. >
10. =

Minute 4

1. 83
2. 35
3. 50
4. 36, 36, 4, 9

5. 7
6. 69
7. 112
8. $\frac{1}{2}$
9. $\frac{1}{3}$
10. $\frac{1}{5}$

Minute 5

1. False
2. 15
3. 63
4. \$4.50
5. 27
6. 9
7. 80
8. 108
9. 5
10. 7

Minute 6

1. 95
2. 120
3. True
4. 7
5. 4
6. 12
7. 52
8. 10
9. Apples
10. Oranges and pears

Minute 7

1. $\frac{1}{3}$
2. 22
3. 58
4. 12
5. 9
6. $3,000 + 20 + 4$
7. 68
8. 4
9. 8
10. 4

Minute 8

1. True
2. 50
3. \$5.00
4. 37
5. 171
6. .25
7. 81
8. 60
9. 7800
10. 9

Minute 9

1. True
2. 11
3. True
4. 39
5. 4sides, 4 angles
6. 51
7. 66
8. 3
9. +
10. -

Minute 10

1. 104
2. 89
3. 6
4. 5
5. 50
6. 6
7. 6
8. 150
9. 80
10. 50

Minute 11

1. 4
2. 90 degrees
3. 28.75
4. 51
5. 45
6. 854

7. 4
8. 15 minutes
9. 10 minutes
10. 45 minutes

Minute 12

1. 8
2. 27,30
3. 72
4. B
5. 36
6. 15
7. 1024
8. Yes
9. No
10. No

Minute 13

1. 4 and 6
2. 9
3. True
4. 34
5. 1.75
6. 1824
7. 41
8. =
9. <
10. =

Minute 14

1. 48
2. 3976
3. 100
4. 50
5. 6
6. -2
7. 6
8. <
9. >
10. <

Minute 15

1. False
2. 1708
3. 94

4. \$3.00
5. 22
6. 84
7. 6
8. $\frac{2}{3}$
9. $\frac{3}{4}$
10. $\frac{1}{2}$

Minute 16

1. 140 stamps
2. 6
3. 83
4. 4
5. 6sides, 6angles
6. 76
7. 2580
8. drive/carpool
9. Skate
10. drive/carpool and skate

Minute 17

1. 3522
2. 30
3. 101
4. 10
5. 7
6. $4000 + 800 + 50 + 7$
7. 56
8. 11
9. 8
10. 9

Minute 18

1. 7
2. 93
3. \$1.05
4. 60
5. .60 or 60 cents each
6. 6200
7. 3090
8. 120
9. 79
10. 3

Minute 19

1. $\frac{3}{8}$
2. True

3. 92
4. 9
5. 12
6. $400+60+5$
7. 4494
8. 76
9. +
10. X

Minute 20

1. 85
2. 8
3. 15
4. 5
5. 894
6. 3
7. 2124
8. 600
9. 500
10. 600

Minute 21

1. 19
2. 45 degrees
3. 282
4. Kilometers
5. Centimeters
6. Meters
7. 4326
8. 19
9. 1 hour and 25 minutes
10. 1 hour and 30 minutes

Minute 22

1. 617
2. 21
3. 671
4. A
5. 6.25
6. 48, 56, 64
7. 4336
8. Acute
9. Right
10. Obtuse