

Std: 7.N.1

1 Which of the following results in an irrational number?

A. $\sqrt{10}$ B. $\sqrt{16}$ C. $\sqrt{81}$ D. $\pi - \pi$

Level 2

Std: 7.N.1

2. Which set of numbers includes only rational numbers?

A. $\frac{0}{3}$ -4.5 $\frac{-4}{-3}$ $\sqrt{12}$

B. $\sqrt{9}$ -2.1 -2.5 $\frac{2}{5}$

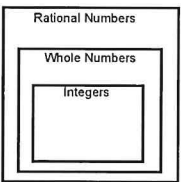
C. $\sqrt{2}$ -4.07 $\sqrt{5}$ $\sqrt{11}$

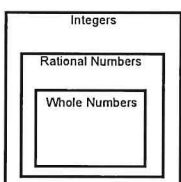
D. $\sqrt{7}$ $\sqrt{22}$ $\sqrt{4}$ $\frac{-3}{-4}$

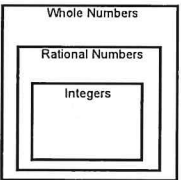
Level 3

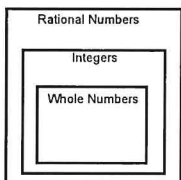
Std: 7.N.1

3. Which graphic organizer correctly groups the following number sets?

A. 

B. 

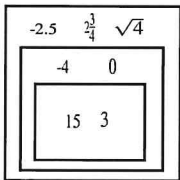
C. 

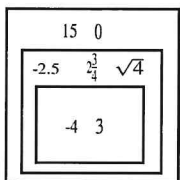
D. 

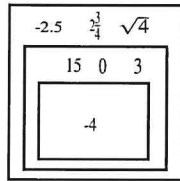
Level 2

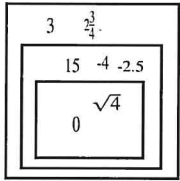
Std: 7.N.1

4. Which graphic organizer correctly groups the following numbers?

A. 

B. 

C. 

D. 

Level 3-4

Std: 7.N.1

5. Which set of numbers is in order from least to greatest?

A. -3.5, $-\frac{19}{5}$, $-\sqrt{9}$, -9

B. $-\frac{19}{5}$, -9, -3.5, $-\sqrt{9}$

C. -9, $-\frac{19}{5}$, -3.5, $-\sqrt{9}$

D. -9, -3.5, $-\frac{19}{5}$, $-\sqrt{9}$

Level 3

Std: 7.N.2

6. Which of the following expression has a value of -8?

A $(-24) \div (-3)$

B $(-3) \div (-24)$

C $(-4) \times (-2)$

D $(4) \times (2)$

Level 2

7. Simplify:

Std: 7.N.2

$$12.5 \times (-0.25)$$

- A - 3.125
 B 3.125
 C - 50
 D 50

Level 2

8. Josefina walked up a hill with an altitude (height of the hill) of 1200ft. She then descended 800 ft. What integer represents her final altitude?

Std: 7.N.2

- A -400
 B 400
 C -800
 D 800

Level 3-4

9. Simplify:

Std: 7.N.2

$$12 \times (4.5^2 + 10 \div 0.25) + 10$$

- A 733
 B 833
 C -251
 D -833

Level 3-4

10. Simplify:

Std: 7.N.2

$$-5.255 - (-13.35)$$

- A -8.095
 B -18.605
 C 8.095
 D 18.605

Level 3

11. Simplify:

Std: 7.N.2

$$\left| \frac{3}{11} \right| + \frac{2}{5}$$

- A $\frac{7}{55}$
 B $\frac{-7}{55}$
 C $\frac{37}{55}$
 D $\frac{-37}{55}$

Level 3

12. Which expression is equivalent to: $\frac{3}{10}$

Std: 7.N.2

- A $\frac{3}{5} - \frac{1}{3}$
 B $\frac{4}{5} \times \frac{3}{6}$
 C $\frac{4}{5} - \frac{3}{6}$
 D $\frac{3}{5} \div \frac{1}{3}$

Level 3